

MyMaths.co.uk Online Homework

Q1 – Recognising fractions Numont School : francine smith

Drag the fractions into the correct boxes.

Q1 Q2 No Calc Total

$\frac{1}{2}$ $\frac{1}{4}$ Neither

Introducing fractions [12] Markit

MyMaths.co.uk Online Homework

Q2 – Halves and quarters Numont School : francine smith

Find half of 4.

Click to shade in a half.

Click to shade in a quarter.

Introducing fractions [6] Markit

MyMaths.co.uk Online Homework

Q1 – Halves, quarters and thirds Numont School : francine smith

Here are 12 bananas.

Use the grey boxes to split them in half.

How many bananas are there in each group?

What is one-half of 12?

Here are 20 cubes.

Use the grey boxes to group them into quarters.

How many cubes are there in each group?

What is $\frac{3}{4}$ of 20?

Modelling fractions of amounts [6] Markit

MyMaths.co.uk Online Homework

Q2 – Bar models for fractions Numont School : francine smith

Select the diagram that shows two-thirds.

Select the diagram that shows two-quarters of 4.

What is one-quarter of 16?

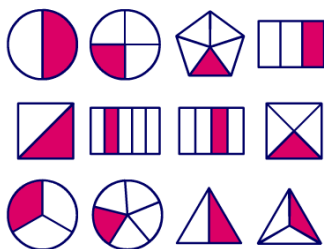
4 12 8

Modelling fractions of amounts [3] Markit

Q1

Q1 - Shaded fractions

Drag the fractions into the correct boxes.



$\frac{1}{2}$	$\frac{1}{3}$
$\frac{1}{4}$	$\frac{1}{5}$

[12]

Simple fractions

Markit

Q1

Q2 - Fruit

Numont School : francine smith

Click to colour in half.


How many bananas should be coloured?



Q2

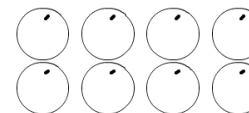
Click to colour in a quarter.

How many apples should be coloured?



Click to colour in $\frac{3}{4}$.

How many oranges should be coloured?



[6]

Simple fractions

Markit