

Q1 – Measuring and comparing

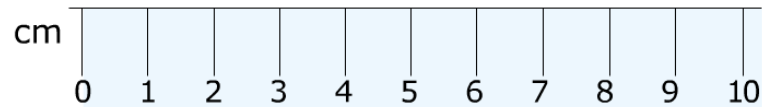
Numont School : francine smith

Q1


Fill in the values and use the symbols $<$, $>$ or $=$ to compare the measurements.



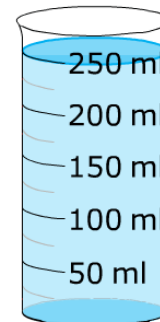

cm ? cm



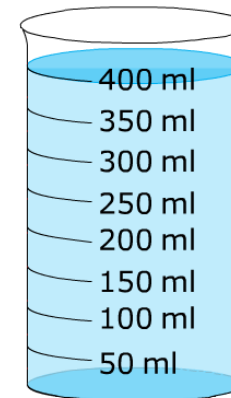
Drag the ruler.



?



?



[5]

Comparing measures 2

Markit



Q2



No Calc

Total



Q1

0
5

Q2 – Ordering; word problems

Order each set of measurements according to the $<$ or $>$ symbol used.

98 g

73 g

45 g

?

 $<$

?

 $<$

?

[1]

27 ml

77 ml

51 ml

?

 $>$

?

 $>$

?

[1]

Q2

0
4

Solve the word problems.

Ali and Jo are growing flowers.
Jo's flower is 22 cm tall.
Ali's flower is half as tall
as Jo's flower.

How tall is Ali's flower?

 cm

[1]

Mia, Finn and Chen are sharpening pencils.
Mia's pencil is 15 cm long.
Finn's pencil is 11 cm long.
Chen's pencil is 5 cm long.

Who has the longest pencil?

Mia

Finn

Chen



[1]

No
Calc

Total

0
9

Comparing measures 2

Markit

Q1 – Units and length

Numont School : francine smith

Q1

What would you use to measure these things?

Drag the correct unit.



length of a worm

?

kilograms



mass of a man

?

centimetres

grams

litres



volume of a flower
vase

?

metres

[3]

Measures


Markit

No
Calc

Total

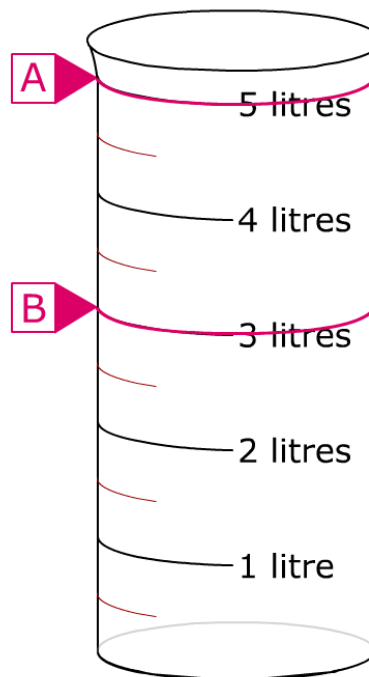
Q2 – Mass and volume

What does this alien weigh?



kg [1]

Read the scale and fill in the boxes.



A = litres

B = litres

[2]

Measures

Markit